

Year 6

12 days of Christmas

SATs Revision



Timed daily activities in **Arithmetic**,
Reasoning and **Grammar** for **12 days**

Name:

Teacher's Name:


School:

Day 1

Arithmetic Questions

4

$$8,912 \div 8 =$$




1 mark



5


$$\frac{4}{5} \times \frac{2}{3} =$$



1 mark

6

$$6.72 + 8.9 =$$



1 mark

Day 1**Arithmetic Questions****7**

$$4,006 - 2,192 =$$

1 mark

8

$$432 \div 100 =$$

1 mark

9

$$21,837 + 9,023 =$$

1 mark

Day 1

Arithmetic Questions

10	$\begin{array}{r} 192 \\ \times 64 \\ \hline \end{array}$	<input type="text"/> 2 marks
Show your method	<input style="width: 150px; height: 40px;" type="text"/>	

Now, use your answers to mark your work and write your score in your booklet and on your scoresheet.



Well done!


You've completed your brain workout for today!

Time taken

min	sec
-----	-----

Total Score

 11



Day 2

Reasoning Questions

Don't forget to start your timer!




1

This table shows the approximate distance, in kilometres, from Lapland to Santa's first three places to visit on Christmas Eve.



Region	Distance in kilometres
Portugal	3,783 km
Hong Kong	7,749 km
Germany	1,702 km



How much further is Hong Kong from Lapland than the combined distance of the other two places?

	<p>Show your method</p> <div style="border: 1px solid black; width: 150px; height: 30px; margin-left: auto; margin-right: 20px; text-align: center;"> km </div>	<div style="border: 1px solid black; width: 40px; height: 25px; margin: 0 auto;"></div> <p>2 marks</p>

Day 2**Reasoning Questions****2**

The elves are raising money for their Christmas appeal.

Their target is £580

So far, they have collected £124.12

How much more money do they need to reach their target?

£

1 mark

3

Write the missing number to make this multiplication correct.

$$4.5 \times \square = 450$$

1 mark

4Write two factors of 28 that are **not** factors of 14.

and

1 mark

Day 2

Reasoning Questions

5

Here is the weekly timetable for Santa’s elves to follow, when looking after the reindeers.

Time	Mon	Tues	Weds	Thurs	Fri	Sat	Sun
8:00am – 9:30am	Barn Cleaning & Breakfast	Barn Cleaning & Breakfast	Barn Cleaning & Breakfast	Barn Cleaning & Breakfast	Barn Cleaning & Breakfast	Barn Cleaning & Breakfast	Barn Cleaning & Breakfast
12:30pm – 1:30pm	Lunch	Lunch	Lunch	Lunch	Lunch	Lunch	Lunch
3:30pm – 5:00pm	Outdoor Exercise	Flying Training	Outdoor Exercise	Flying Training	Outdoor Exercise	Flying Training	Flying Training
6:30pm – 7:00pm	Rudolph’s nose polishing	Coat Brushing	Rudolph’s nose polishing	Big Bath Time	Rudolph’s nose polishing	Coat Brushing	Storytime with Santa

What is the total number of hours for ‘Flying Training’ on this timetable?

hours

1 mark

6

A Christmas pudding has a diameter of 36cm.



What is the **radius** of the Christmas pudding?

cm


1 mark

Day 2

Reasoning Questions

7

Look at the letters in the word below.



Circle the letter that has **perpendicular** lines but **no parallel** lines.

F E A S T

1 mark

8

Write the missing numbers to make this **multiplication** grid correct.

X			


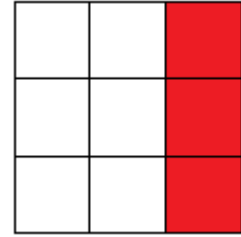



1 mark

Day 2

Reasoning Questions

9

Tick one shape that has $\frac{2}{3}$ shaded.



Now, use your answers to mark your work and write your score in your booklet and on your scoresheet.

Amazing!


You've completed your brain workout for today!

Time taken

min
sec

Total Score

10



Day 3

Grammar Questions

Don't forget to start your timer!



1

Which sentence is an exclamation?

Tick one

What an amazing Christmas tree

How long till Christmas eve

The elves loaded Santa's sleigh

The night was quiet, all was still

1 mark

2

Which sentence is punctuated correctly?

Tick one

"Quick, jump in" called Santa.

"Quick, jump in!" called Santa.

"Quick jump in?" called Santa.

"Quick, jump in". called Santa.

1 mark

Day 3

Grammar Questions

3

Tick one box in each row to show how the modal verb affects the meaning of the sentence.

Sentence	Modal verb indicates certainty	Modal verb indicates possibility
If you've been good, Santa might bring you presents.		
We may have enough potatoes for the Christmas dinner.		
Christmas is only three weeks away.		
The elves will have the sleigh ready for midnight.		

2 marks

4

Circle the **adjective** in the sentence below.

Mohammed knew that the enormous present under the Christmas tree belonged to him.



1 mark

Day 3

Grammar Questions

5

There are two words spelt **incorrectly** in the following sentence.
Circle them.

David's stoking hung over the fireplace, ready for Christmas mourning.




1 mark

6

Tick one box to identify the **relative clause** in the sentence below.

Mrs Claus prepared hot coco, which tasted amazing.




1 mark

7

Write a **noun phrase**, containing at least three words, to complete the sentence below.

Remember to punctuate your answer correctly.

_____ was trialling a
new way of building toy trains.



1 mark

Day 3

Grammar Questions

8

Tick the sentence that must end with a **question mark**.

What happened before Santa sprinkled magic dust on the reindeer's hooves is a secret

Why the elves wore pointy shoes is only something Santa knew

How the reindeer flew was a mystery

When do children go to sleep on Christmas Eve

Tick **one**



9

The **prefix de-** can be added to the word activate to make the word deactivate.

What does the word **deactivate** mean?

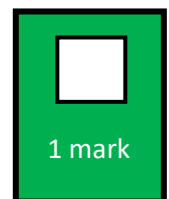
to cause something to be no longer active

to make something active again

to make something more active

to cause something to become more active

Tick **one**



Day 3

Grammar Questions

10

Circle the correct **verb form** in each underlined pair, to complete the sentences below.

The children was / were excited about opening their presents.

The stockings was / were packed full to the brim.

Santa was / were only fifty miles from home.

1 mark

Now, use your answers to mark your work and write your score in your booklet and on your scoresheet.

Good job!

You've completed your brain workout for today!

Time taken

min

sec


Total Score

11

Three French hens!

Arrêtez!

That's all for today!



Day 4

Arithmetic Questions

Don't forget to start your timer!



1

$$90 + 2,000 =$$

1 mark

2

$$2.6 + 0.624 =$$

1 mark

3

$$\boxed{} = 8000 - 70$$

1 mark



Day 4**Arithmetic Questions****7**

$$\begin{array}{r} 29 \\ \times 15 \\ \hline \end{array}$$

Show
your
method

2 marks


8

$$2\frac{2}{7} \div \frac{4}{5} =$$

2 marks

9

$$33 \times 0$$



1 mark

Day 5

Reasoning Questions

Ho! Ho! Ho! Timer at the ready!



1

A herd of reindeer ate their way through a bag of 120 carrots.

They shared the carrots **equally**.

They ate 15 carrots each.



How many reindeer were in the herd?

1 mark

2

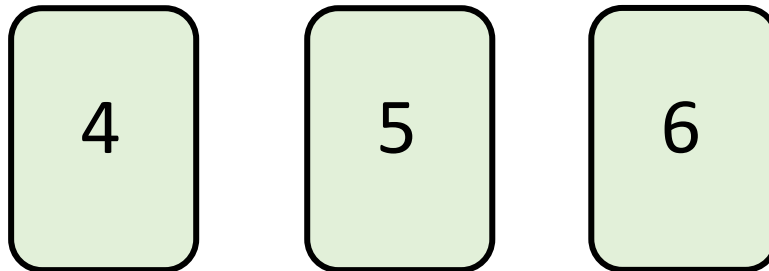
A **square** number and a **prime** number have a **product** of 20

What are the two numbers?

$$\begin{array}{|c|} \hline \\ \hline \end{array} \times \begin{array}{|c|} \hline \\ \hline \end{array} = 20$$

square number prime number

1 mark

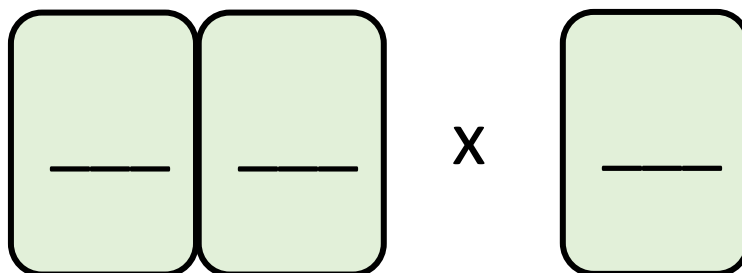
Day 5**Reasoning Questions****3** Mrs Elf uses these digit cards.

She makes a 2-digit number and a 1-digit number.

She multiplies them together.

Her answer is a **multiple of 4**.

What could Mrs Elf's multiplication be?

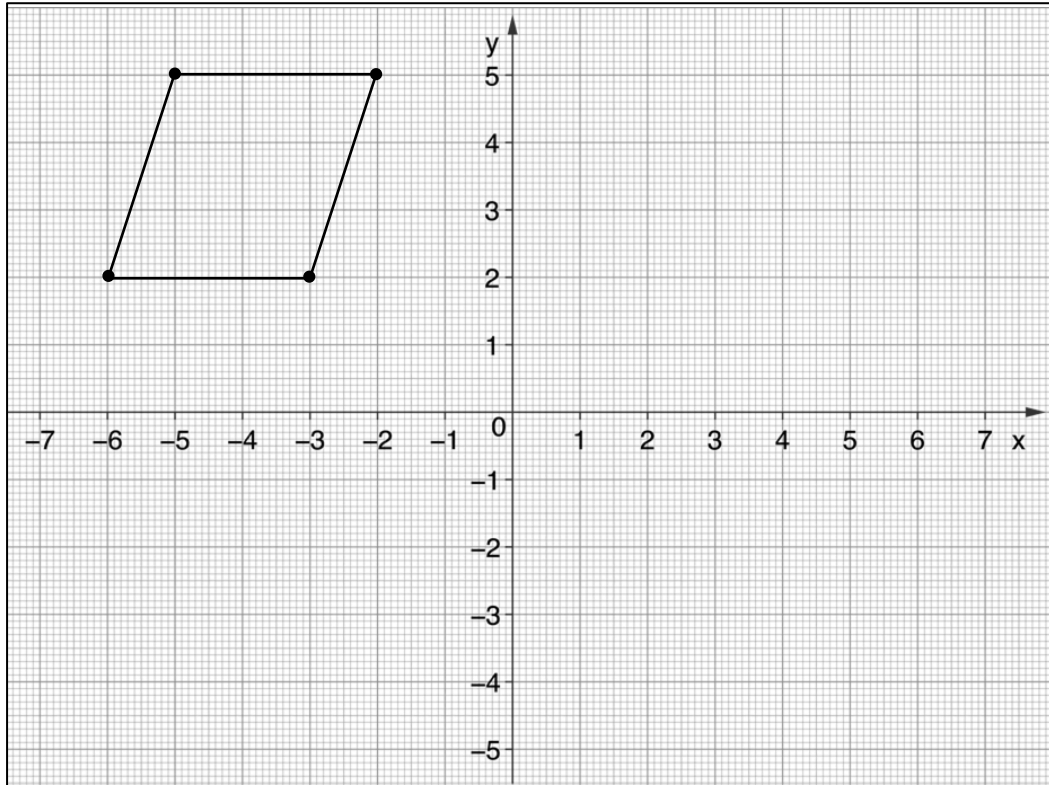

1 mark

Day 5

Reasoning Questions

4

Here is a parallelogram drawn on a coordinate grid.



The parallelogram is translated **6 down** and **9 right**.

Draw the parallelogram in its new position.



1 mark

Write the coordinates of its new position.

(,) (,) (,) (,)



1 mark

Day 5

Reasoning Questions

5

Ella wants to go Christmas shopping, in London.

She needs to arrive in London by **1:30 pm**.



Circle the latest time that Ella can leave Manchester.

Leaves Manchester	Arrives London
10:04	12:44
10:38	13:18
11:02	13:42
11:45	14:25
12:05	14:45

1 mark

6

The numbers in this sequence increase by the same amount each time.

Write the missing numbers.

	2	$2\frac{4}{5}$	$3\frac{3}{5}$	
--	---	----------------	----------------	--

2 marks

Day 5

Reasoning Questions

7

Here is a pattern of number pairs.

z	y
1	5
2	12
3	19
4	26
5	33

Complete the rule for the number pattern.

$$y = \boxed{} \times z - \boxed{}$$

1 mark

8

Fern wanted a bicycle for Christmas. It was in the shop for £125.

The shop had a sale and reduced the price by 35%.

What is the new price of the bicycle?



Show your method

£

2 marks

Day 5

Reasoning Questions

9

Reggie's Christmas present was in the shape of a cube.



Calculate the **volume** of Reggie's Christmas present.

Show your method													<input type="text"/> cm ³	<input type="checkbox"/> 2 marks

Day 5

Reasoning Questions

Now, use your answers to mark your work and write your score in your booklet and on your scoresheet.

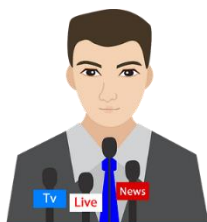
Wonderful!

You've completed your brain workout for today!

Time taken

min

sec



Five gold rings!

Day 6

Grammar Questions



1

Circle the **verb** in the sentence below.

On Christmas Eve, Santa and his galloping reindeer elegantly land on rooftops all over the world.

1 mark



2

Rewrite the sentence below in the **active** voice. Remember to punctuate your answer correctly.

The presents were delivered by Santa, on Christmas Eve.

1 mark

3

Rewrite the underlined verbs in the sentence below so that they are in the **present progressive** form.

Leon enjoys toy making. He wants to open his own shop one day.



1 mark

Day 6

Grammar Questions

4

Draw a line to match each **prefix** to the correct word so that it makes a new word.

One has been done for you.



in

imaginable

un

construct

mis

informed

de

perfect

im

describable



2 marks

Day 6

Grammar Questions

5

Complete the table below by adding a **suffix** to each noun to make an adjective.

Noun	Adjective
creation	
courtesy	
star	
athlete	
photograph	



2 marks

6

Complete each sentence below with a word formed from the root word care.

The children _____ wrapped their presents.

Megan was _____ not to tear the wrapping paper.



1 mark

7

Complete the sentence below with a **noun** formed from the verb enjoy.

The Christmas concert gave great _____ to the adoring audience.



1 mark

Day 6

Grammar Questions

8

Insert two **hyphens** in the correct places in the sentence below.

The bad tempered granny only smiled when the children performed some of her favourite well known Christmas carols.

1 mark

Now, use your answers to mark your work and write your score in your booklet and on your scoresheet.


Magnificent!

You've completed your brain workout for today!

Time taken

min

sec



Day 7**Arithmetic Questions****7**Show
your
method

$$\begin{array}{r} 283 \\ \times 47 \\ \hline \end{array}$$

2 marks

8

- 1,000 = 29,659

1 mark

9

$27 - (3 \times 5) =$

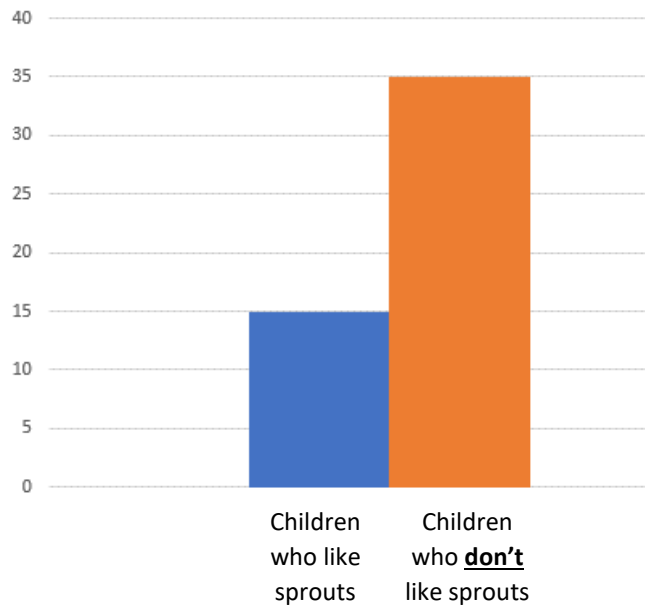
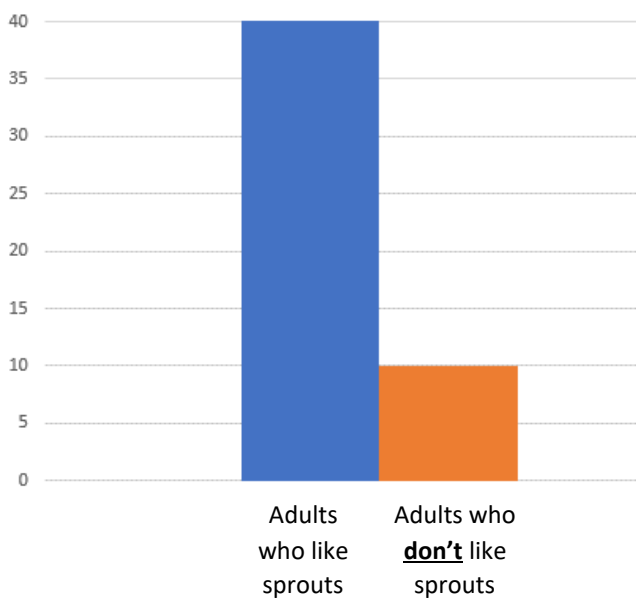
1 mark

Ho! Ho! Ho! Timer at the ready!




1 A survey was taken, at a Christmas party, of how many adults and children liked to eat sprouts.

These graphs show the results.



How many more adults like sprouts than children?



1 mark

Altogether, how many people took part in the survey?

1 mark

Day 8

Reasoning Questions

2

Write the missing numbers.

120 months =

years

98 days =

weeks

300 minutes =


hours

2 marks

3

Here is a rule for the time it takes to cook a Turkey for Christmas Dinner.

Cooking time = 30 minutes plus an extra
25 minutes per kilogram



What duration, in hours and minutes, will it take to cook a 4kg turkey?

Hours

Minutes

1 mark

What is the mass of a turkey that takes 2 hours and 35 mins to cook?

kg

1 mark

Day 8

Reasoning Questions

4

Write the missing number to make this **division** correct.

$$350 \div \boxed{} = 3.5$$

1 mark

5

Santa's Reindeer all have their own water bottles to drink from. This one belongs to Comet. **It has 755 ml left in the bottle.**



Santa pours out a **quarter of a litre** on Monday evening and **half a litre** out on Tuesday morning.

How many millilitres are left in Comet's water bottle?

ml

1 mark

Day 8

Reasoning Questions

6



Mrs Claus decorates the Christmas tree with baubles and needed **60 baubles** in total.

Two of Santa's top elves went shopping and Mrs Claus needed to decide who got the best deal and cost her the **least** money.

Rory bought 12 baubles for £2.40

Sam bought half-a-dozen baubles for £1.80

Mrs Claus says,

'Rory's baubles are the cheapest.'

Explain why Mrs Claus is correct.

1 mark

Day 8

Reasoning Questions

7

When delivering presents, Santa comes to three door numbers written in Roman Numerals.

Draw a line to the correct door numbers with their matching figures.



56

21

205

1 mark

Now, use your answers to mark your work and write your score in your booklet and on your scoresheet.

Superb!

Your brain workout for today has finished!

Time taken

min

sec

Eight Maids a-milking!

Total Score

10

Day 9

Grammar Questions

Ho! Ho! Ho! Here we go again!



1

Which sentence uses **capital letters** correctly?

Tick one

santa's elves made toys at the North Pole.

santa's elves made toys at the North pole.

Santa's Elves made toys at the north pole.

Santa's elves made toys at the North Pole.

1 mark

2

The **prefix un-** can be added to the word seen to make the word unseen.

What does the word **unseen** mean?

Tick one

never seen

not seen

seen again

seen before



1 mark

Day 9

Grammar Questions

3

Which verb form completes the sentence?

After Santa _____ the presents, he flew back to the North Pole.

Tick one

had delivered

is delivering

has delivered

was delivering



1 mark

4

Tick the option that correctly completes the sentence below.

_____ is the world's best-selling single with estimated sales of over one hundred million copies worldwide.

Tick one

'White Christmas' sung, by Bing Crosby,

'White Christmas', sung by Bing, Crosby

'White Christmas', sung by Bing Crosby,

'White Christmas' sung by, Bing Crosby,

1 mark

Day 9**Grammar Questions****5**Tick one box to show the correct place for a **colon** in the sentence below.

There were three elves with names beginning

with 'E' Emily, Ernie and Eddie.

1 mark

6What is the **word class** of the underlined words in the sentence below?Santa's bright, red coat could be seen on the tiled rooftops of many terraced houses that evening.Tick **one**

adverbs

adjectives

determiners

nouns

1 mark


Day 9**Grammar Questions****7**Which sentence uses the word back as an adjective?Tick **one**

Rudolph kicked his back legs.

Comet's back had a white tuft of fur on it.

Vixen was at the back of the line.

Dasher came back after a flying lesson.



1 mark

8Which sentence uses the word clean as a **verb**?Tick **one**

Leader Elf had a clean driving licence.

Blitzen performed a clean test flight.

Mrs Claus loved a clean and tidy house.

Santa needed to clean the chimney.

1 mark

Day 9

Grammar Questions

9

Which sentence is the most formal?

Tick one

Santa needs your help!


Can you help me on Christmas Eve?

Mr. Claus requires your assistance on Christmas Eve.

Can you lend a hand on Christmas Eve, please?

1 mark

Now, use your answers to mark your work and write your score in your booklet and on your scoresheet.



Wooahoo!

You're finished for the day!

Time taken

min	sec
-----	-----

Total Score

9

Day 10

Arithmetic Questions

4

1 7 5 9 8 4

Show
your
method

2 marks

5

+ 1,000 = 40,922

1 mark

6

$56 + (3 \times 8) =$

1 mark

Day 10

Arithmetic Questions


7

$$2 \times \frac{3}{5} =$$

1 mark

8

$$\frac{3}{7} \text{ of } 84 =$$



1 mark

9

$$921 + 8,005 =$$

1 mark

Day 10

Arithmetic Questions

10

$$21.9 - 0.37 =$$

1 mark

Now, use your answers to mark your work and write your score in your booklet and on your scoresheet.



Wow!

That's all for today, folks!

Time taken

min	sec
-----	-----

Total Score
11









Day 11

Reasoning Questions



1

Write the decimal equivalents for the following fractions.

	$\frac{1}{2}$	=	
	$\frac{3}{4}$	=	
	$\frac{1}{5}$	=	
	$\frac{3}{5}$	=	

1 mark

2

Comet needed to be back from his flying training by 7:20pm. Due to bad weather, he came back 45 minutes early.

Write the time Comet arrived back, using the 24-hour clock.



1 mark

Day 11

Reasoning Questions

3

Write the missing numbers to make this **subtraction** calculation correct.

$$\begin{array}{r}
 3 \quad \square \quad 2 \quad 2 \\
 - \quad 1 \quad 7 \quad \square \quad 1 \\
 \hline
 \square \quad 9 \quad 4 \quad 1
 \end{array}$$

1 mark

4

On Monday, 150 of Santa's elves were hard at work.
40% of them were wearing green hats.



How many elves were wearing green hats?

	<div style="border: 1px solid black; width: 100px; height: 30px; margin: auto; display: flex; align-items: center; justify-content: center;"> elves </div>	<input style="width: 40px; height: 20px;" type="text"/> 2 marks
	<div style="border: 1px solid black; width: 100%; height: 100%; background-color: #e6f2ff;"> <div style="position: absolute; top: 5px; left: 5px; width: 80%; height: 80%; border: 1px solid #ccc;"> <p style="margin: 0;">Show your method</p> </div> </div>	

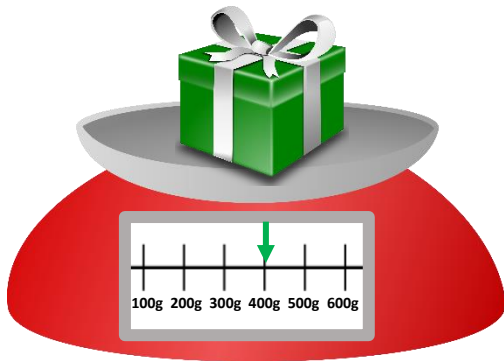
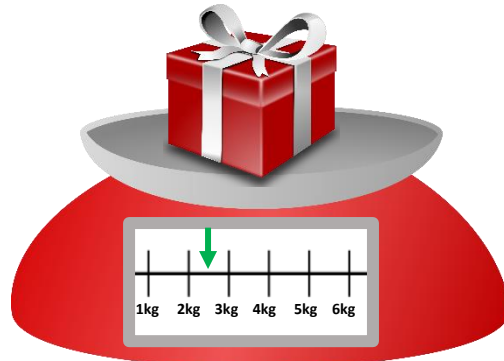
Day 11

Reasoning Questions

5

Grandpa Tom is sending Christmas parcels in the post.

Write the weight of each parcel in the boxes below.


 kg

 g

1 mark

6

Grandpa Tom has a third parcel, it weighs 3kg.
It costs 70p per 200g to send a parcel.

How much will it cost to send Grandpa Tom's third parcel?


	<div style="border: 1px solid black; width: 100%; height: 100%; background-color: #e6f2ff;"> <div style="position: absolute; bottom: 10px; right: 10px; border: 1px solid black; padding: 5px;"> <p>£ <input style="width: 100px; height: 20px;" type="text"/></p> </div> </div>	<p><input type="checkbox"/> 2 marks</p>
	<p>Show your method</p>	

Day 11

Reasoning Questions

7

Write all the factors of 24 on the stockings below.



Now, use your answers to mark your work and write your score in your booklet and on your scoresheet.




Brilliant!

Come back tomorrow for your final day!

Time taken

min	sec
-----	-----

Total Score
9



Eleven pipers piping!




It's the final day! Give it everything you've got!

Day 12

Grammar Questions

1

Draw lines to connect the words in their **word families**.



2

Tick one box to show which sentence has used **plural nouns** correctly.


The tired **elves** went to bed early.

Tick **one**

Mrs Claus was invited to many Christmas **partys**.

The **foxs** were cold on Christmas Eve.

Santa has visited homes in many **cities**.



Day 12

Grammar Questions

3

Tick one box in each row to show whether the apostrophe is used for **omission** or **possession**.

Sentence	Apostrophe used for omission	Apostrophe used for possession
Rachel hadn't bought any Christmas presents yet.		
Santa received Olivia's Christmas list.		
Uncle Naz cleaned Yusuf's sled, ready for the snow.		
This year, we won't be having turkey on Christmas day.		

2 marks

4

The sentence below **does not** include a relative pronoun.

Rewrite the sentence using the relative pronoun **'whose'**.

The cat with the festive hat is smiling.



1 mark

Day 12

Grammar Questions

5

Add 'a' or 'an' to the sentence below.

old man crept carefully across the icy puddles, carrying bag of shopping and wishing he'd bought umbrella with him.

1 mark

6

Rewrite the sentence below in the **passive voice**.

Santa is carrying the Christmas presents.

1 mark



7

Read the sentence below.

The **joyful** choir sang Christmas carols at Mary's front door.

Tick one pair of words below that show an **antonym** and **synonym** for the word 'joyful'.

Synonym	Antonym	Tick one pair
energetic	lifeless	
jolly	miserable	
skilful	talentless	

1 mark

Day 12

Grammar Questions

Now, use your answers to mark your work and write your score in your booklet and on your scoresheet.



You've made it!

Congratulations!

min	sec
-----	-----

Total Score
8

Now, use your answers to mark your work and write your score in your booklet and on your scoresheet.

