

Varied Fluency

Step 5: Translation with Coordinates

National Curriculum Objectives:

Mathematics Year 5: (5P2) [Identify, describe and represent the position of a shape following a reflection or translation, using the appropriate language, and know that the shape has not changed](#)

Differentiation:

Developing Questions to support translating points using coordinates.

Expected Questions to support translating polygons with up to 4 sides using coordinates.

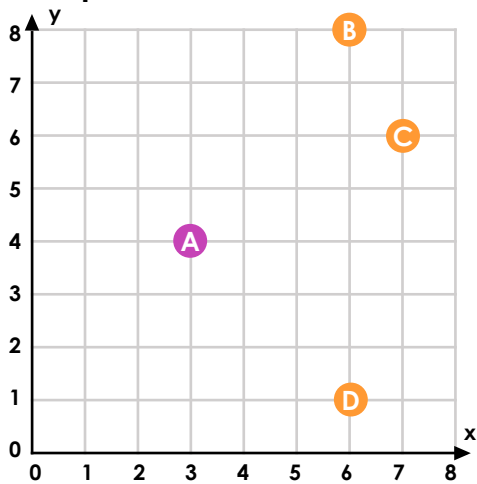
Greater Depth Questions to support translating irregular shapes and compound rectilinear shapes using coordinates.

More [Year 5 Position and Direction](#) resources

Did you like this resource? Don't forget to [review](#) it on our website

Translation with Coordinates

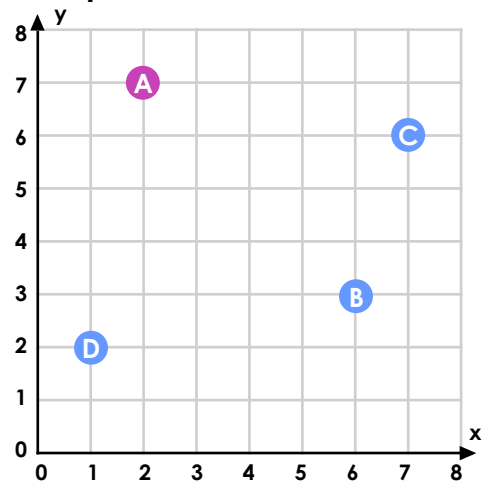
1a. Point A is translated 3 right and 4 up. What are the coordinates of the correctly translated point?



VF

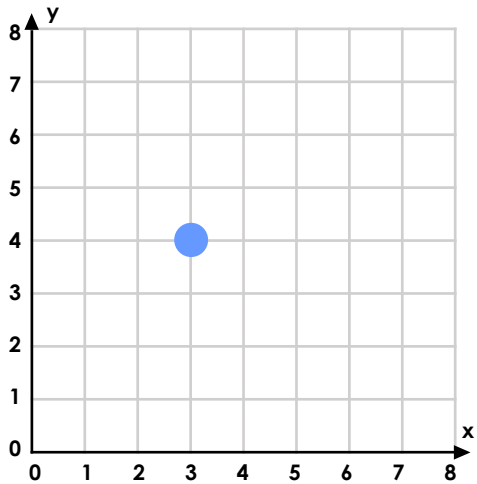
Translation with Coordinates

1b. Point A is translated 1 left and 5 down. What are the coordinates of the correctly translated point?



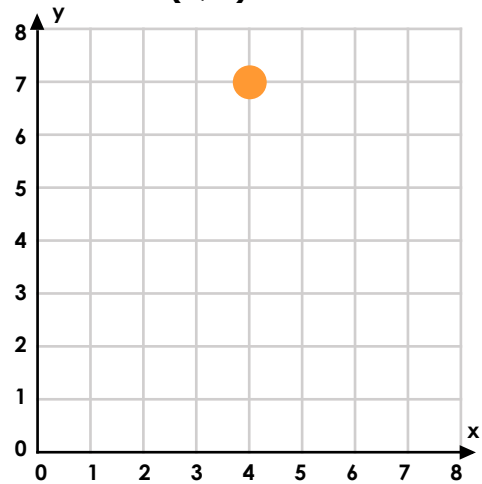
VF

2a. True or false? If the point is translated 1 left and 2 up, the new coordinates will be (4, 6).



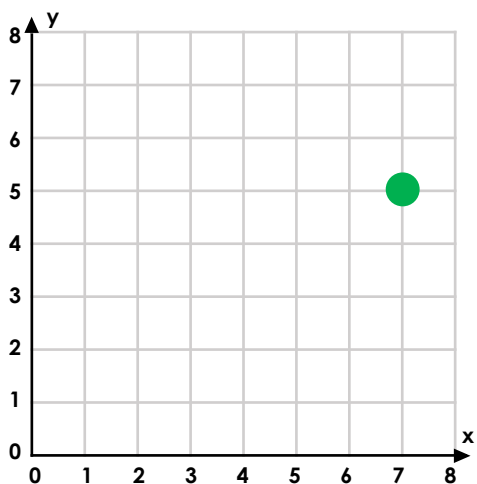
VF

2b. True or false? If the point is translated 4 left and 5 down, the new coordinates of vertex A will be (2, 0).



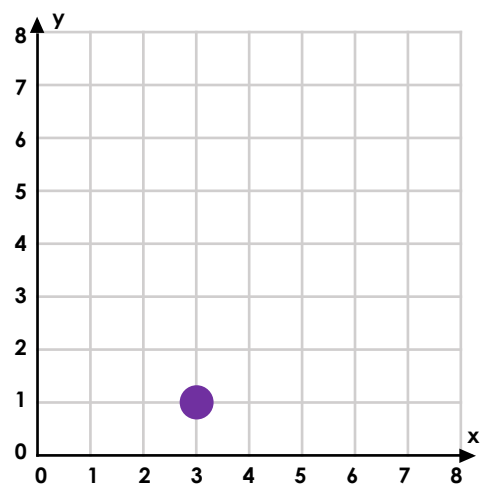
VF

3a. This point has been translated 7 right and 3 up. What are the original coordinates?



VF

3b. This point has been translated 3 left and 5 down. What are the original coordinates?

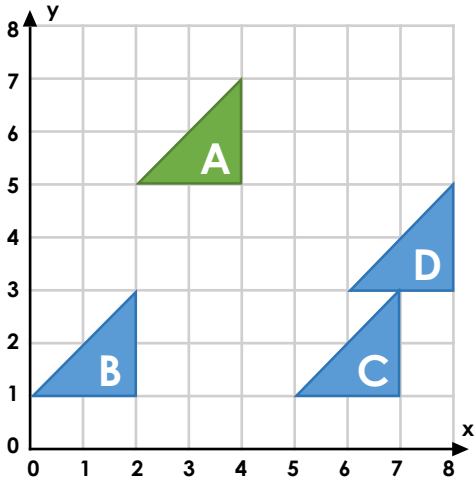


VF

Translation with Coordinates

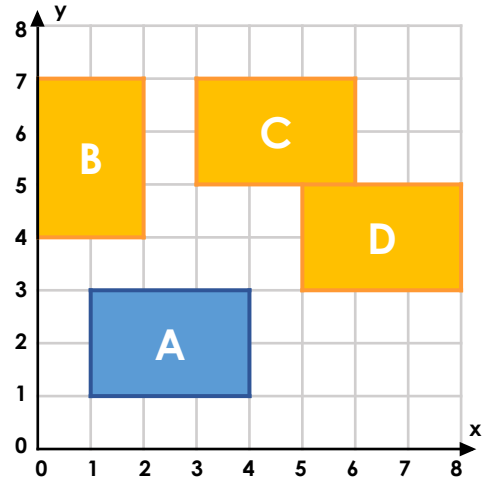
Translation with Coordinates

4a. Triangle A is translated 3 right and 4 down. What are the coordinates of the vertices of the correctly translated shape?



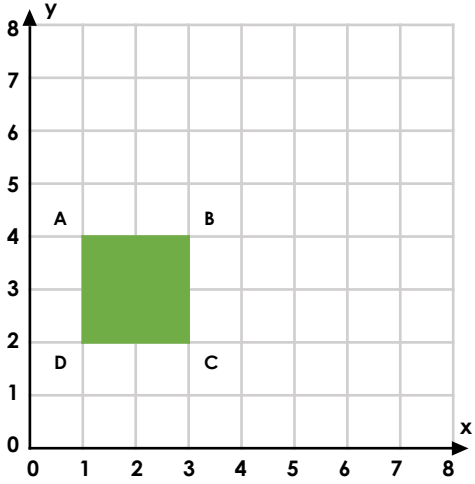
VF

4b. Rectangle A is translated 4 right and 2 up. What are the coordinates of the vertices of the correctly translated shape?



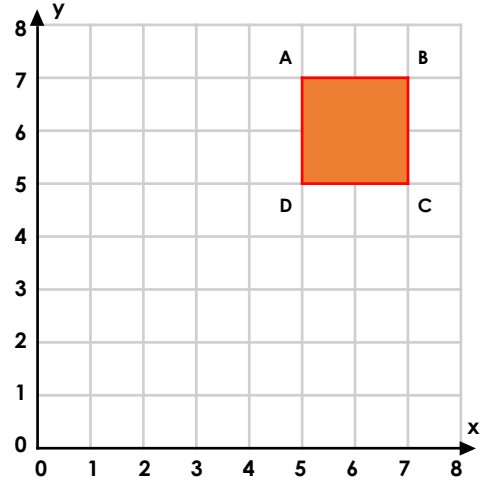
VF

5a. True or false? If the square is translated 1 left and 2 up, the new coordinates of vertex B will be (4, 6).



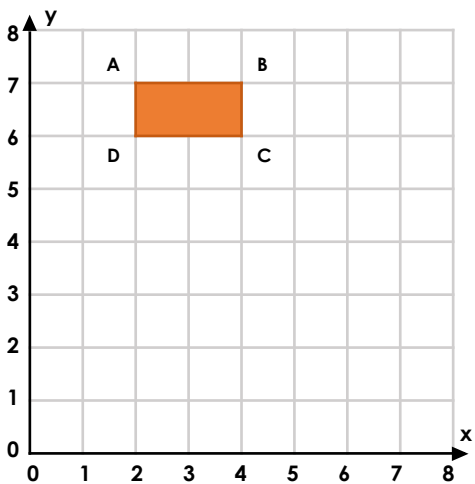
VF

5b. True or false? If the square is translated 4 left and 5 down, the new coordinates of vertex A will be (1, 2).



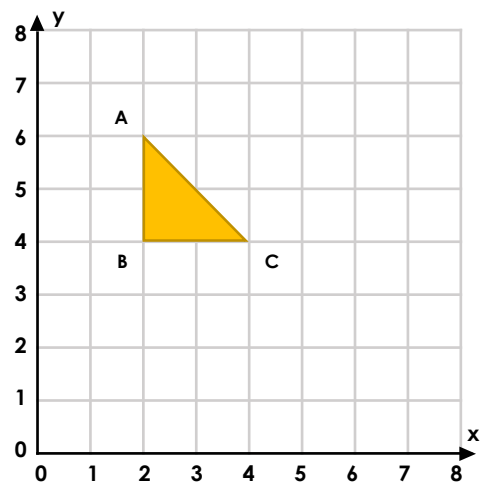
VF

6a. This shape has been translated 2 left and 6 up. What are the original coordinates of each vertex?



VF

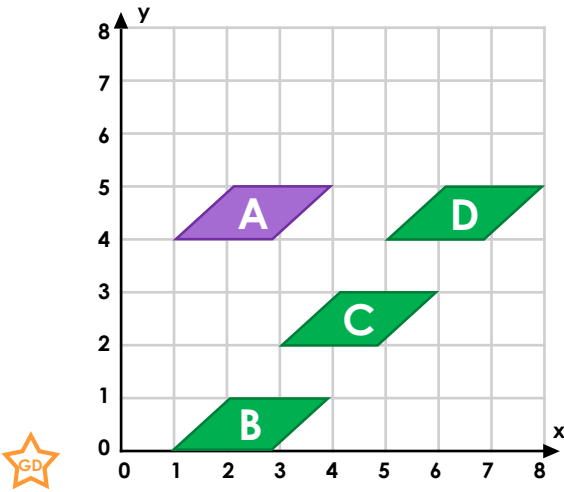
6b. This shape has been translated 3 left and 3 up. What are the original coordinates of each vertex?



VF

Translation with Coordinates

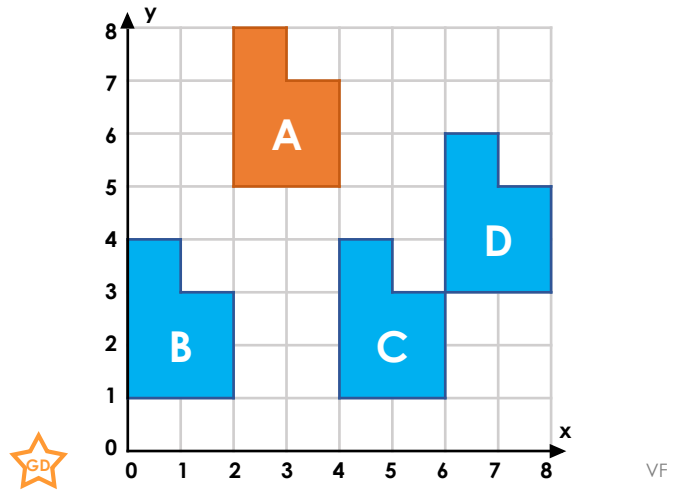
7a. Shape A is translated 0 left and 4 down. What are the coordinates of the vertices of the correctly translated shape?



VF

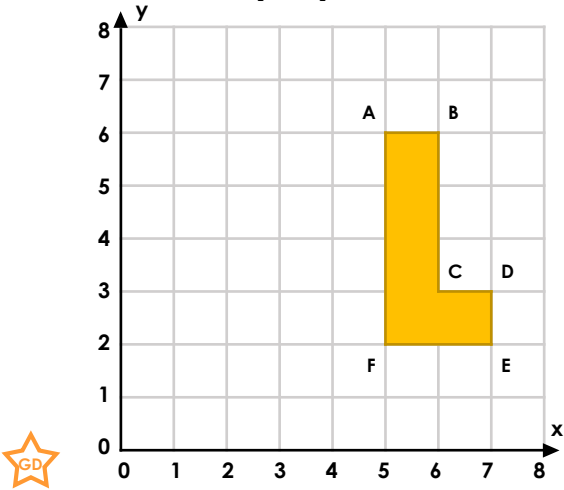
Translation with Coordinates

7b. Shape A is translated 2 right and 4 down. What are the coordinates of the vertices of the correctly translated shape?



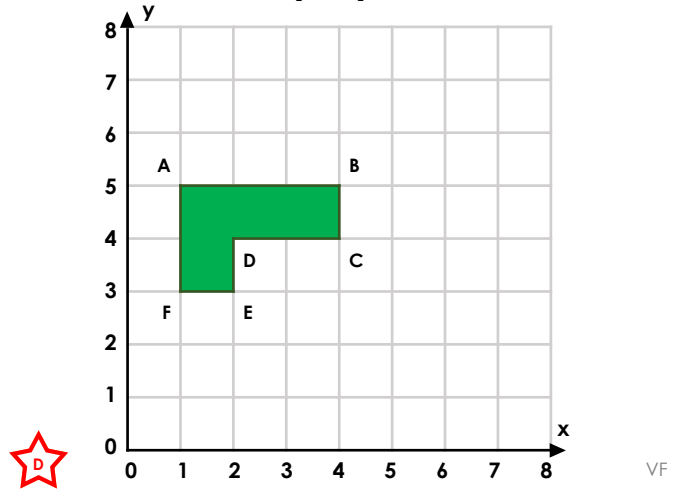
VF

8a. True or false? If the shape is translated 4 left and 1 up, the new coordinates of vertex D will be (3, 4).



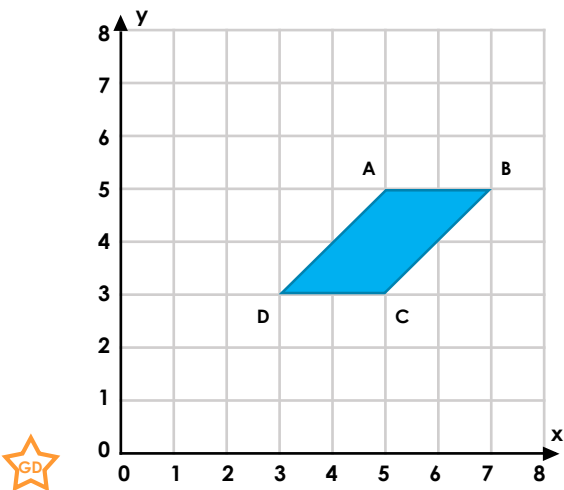
VF

8b. True or false? If the shape is translated 5 right and 2 down, the new coordinates of vertex E will be (1, 7).



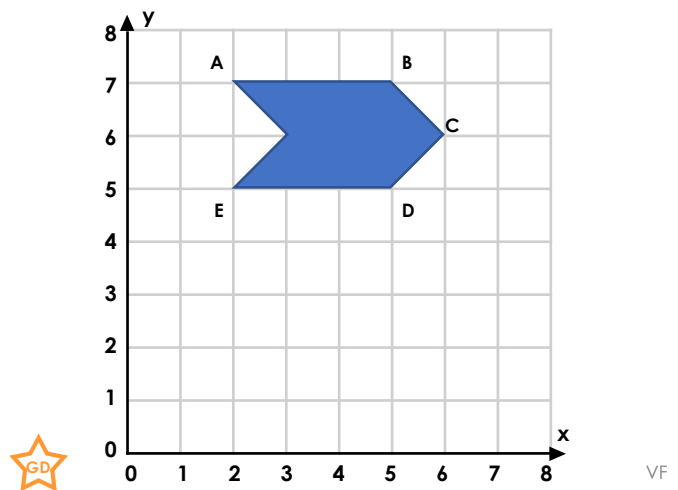
VF

9a. This shape has been translated 2 right and 3 up. What are the original coordinates of each vertex?



VF

9b. This shape has been translated 2 left and 4 up. What are the original coordinates of each vertex?



VF

Varied Fluency
Translation with Coordinates

Developing

- 1a. **B: (6, 8)**
2a. **False; it will be (2, 6)**
3a. **(0, 2)**

Expected

- 4a. **C: (5, 1) (7, 1) (7, 3)**
5a. **False; it will be (2, 6)**
6a. **A (4, 1), B (6, 1), C (6, 0), D (4, 0)**

Greater Depth

- 7a. **B: (1, 0) (3, 0) (2, 1) (4, 1)**
8a. **True**
9a. **A (3, 2), B (5, 2), C (3, 0), D (1, 0)**

Varied Fluency
Translation with Coordinates

Developing

- 1b. **D: (1, 2)**
2b. **False; it will be (0, 2)**
3b. **(6, 6)**

Expected

- 4b. **D: (5, 5) (5, 3) (8, 5) (8, 3)**
5b. **True**
6b. **A (5, 3), B (5, 1), C (7, 1)**

Greater Depth

- 7b. **C: (4, 1) (6, 1) (6, 3) (5, 3) (5, 4) (4, 4)**
8b. **False; it will be (7, 1)**
9b. **A (4, 3), B (7, 3), C (8, 2), D (7, 1), E (4, 1)**