

Varied Fluency

Step 7: 10 More and 10 Less

National Curriculum Objectives:

Mathematics Year 2: (2C1) [Recall and use addition and subtraction facts to 20 fluently, and derive and use related facts up to 100](#)

Differentiation:

Developing Questions to support finding 10 more and 10 less than 2-digit numbers up to 50. Pictorial support provided for all questions.

Expected Questions to support finding 10 more and 10 less than 2-digit numbers up to 100. Pictorial support provided for some questions.

Greater Depth Questions to support finding 10 more and 10 less than 2-digit numbers up to 100. Numbers written as numerals and words. No pictorial support provided.

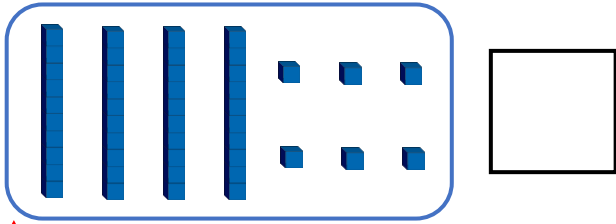
More [Year 2 Addition and Subtraction](#) resources.

Did you like this resource? Don't forget to [review](#) it on our website.

10 More and 10 Less

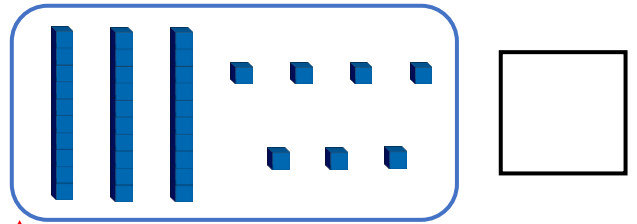
10 More and 10 Less

1a. What is 10 less than the number below?



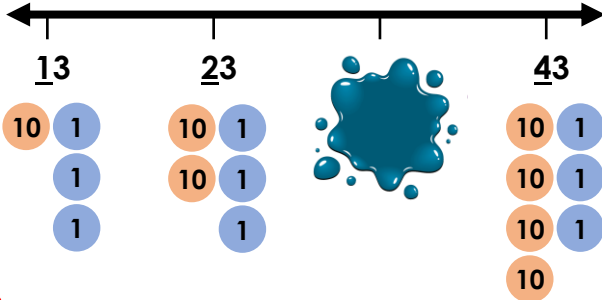
VF

1b. What is 10 more than the number below?



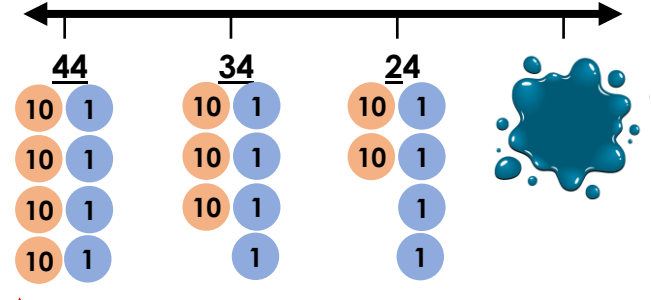
VF

2a. What is the missing number?



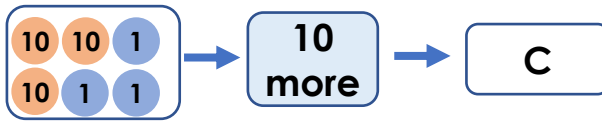
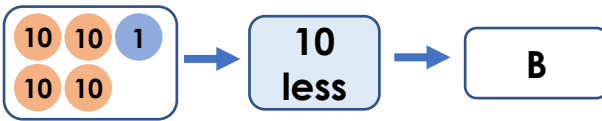
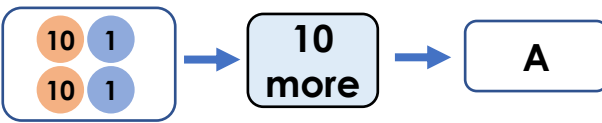
VF

2b. What is the missing number?



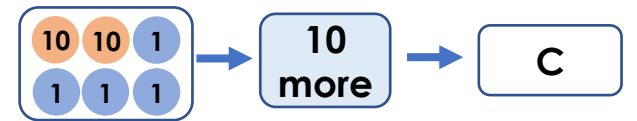
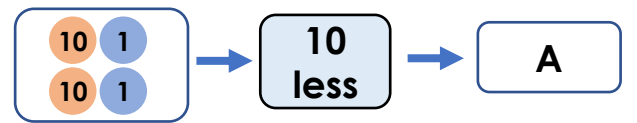
VF

3a. Find the missing numbers.



VF

3b. Find the missing numbers.



VF

4a. What numbers are missing from the number grid?

3	4	5	6	7
<u>13</u>	<u>14</u>	<u>15</u>		<u>17</u>
<u>23</u>	<u>24</u>	<u>25</u>		<u>27</u>
<u>33</u>	<u>34</u>	<u>35</u>		<u>37</u>



VF

4b. What numbers are missing from the number grid?

<u>46</u>	<u>36</u>	<u>26</u>	<u>16</u>	6
<u>45</u>	<u>35</u>	<u>25</u>	<u>15</u>	5
<u>43</u>	<u>33</u>	<u>23</u>	<u>13</u>	3




VF

10 More and 10 Less

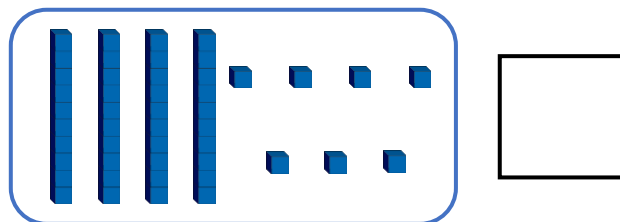
10 More and 10 Less

5a. What is 10 less than the number below?



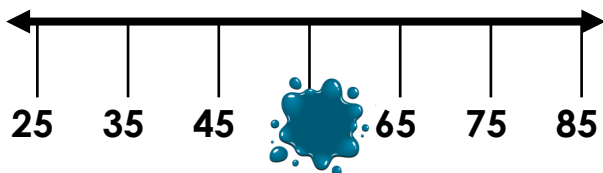
VF

5b. What is 10 more than the number below?



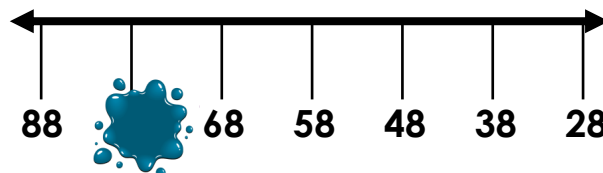
VF

6a. What is the missing number?



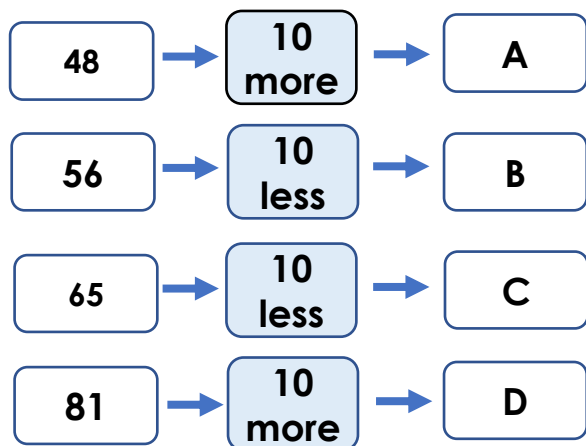
VF

6b. What is the missing number?



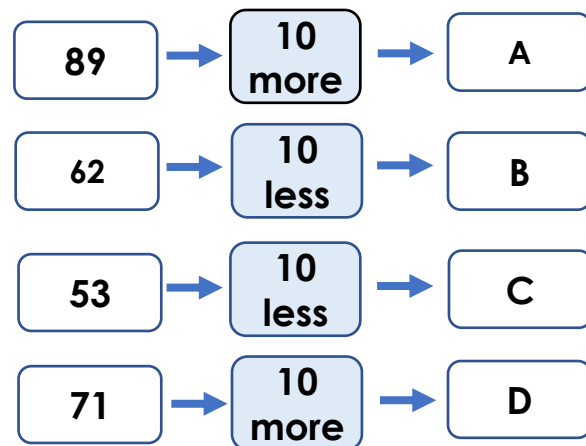
VF

7a. Find the missing numbers.



VF

7b. Find the missing numbers.



VF

8a. What numbers are missing from the number grid?

33	34	35	36	37
43	44	45		47
53	54	55		57
63	64	65		67



VF

8b. What numbers are missing from the number grid?

96	86	76	66	56
95	85	75	65	55
93	83	73	63	53



VF

10 More and 10 Less

10 More and 10 Less

9a. What is 10 less than the number below?

sixty-nine



VF

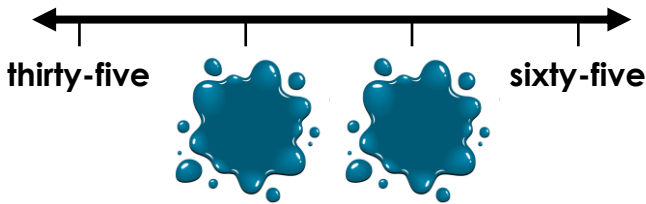
9b. What is 10 more than the number below?

eighty-seven




VF

10a. What are the missing numbers?



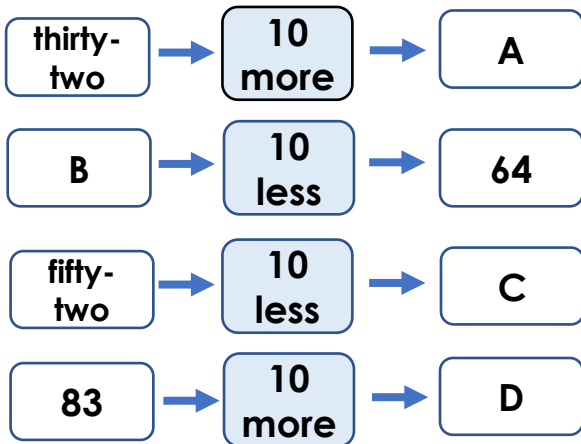
VF

10b. What are the missing numbers?



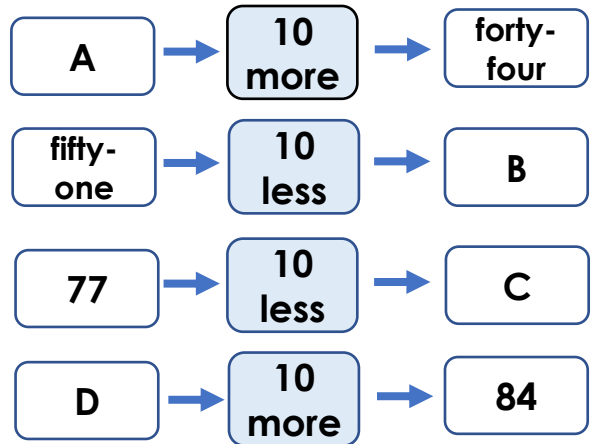
VF

11a. Find the missing numbers.



VF

11b. Find the missing numbers.



VF

12a. What numbers are missing from the number grid?

23	33	43	53	63
24	34	44	54	64



VF

12b. What numbers are missing from the number grid?

85	75	65	55	45
84	74	64	54	44



VF

Varied Fluency
10 More and 10 Less

Developing

- 1a. 36
2a. 33
3a. A = 32, B = 31, C = 43
4a. 16, 26, 36

Expected

- 5a. 56
6a. 55
7a. A = 58, B = 46, C = 55, D = 91
8a. 46, 56, 66

Greater Depth

- 9a. 59
10a. 45, 55
11a. A = 42, B = 74, C = 42, D = 93
12a. 25, 35, 45, 55, 65
26, 36, 46, 56, 66

Varied Fluency
10 More and 10 Less

Developing

- 1b. 47
2b. 14
3b. A = 12, B = 32, C = 34
4b. 44, 34, 24, 14, 4

Expected

- 5b. 57
6b. 78
7b. A = 99, B = 52, C = 43, D = 81
8b. 94, 84, 74, 64, 54

Greater Depth

- 9b. 97
10b. 79, 59
11b. A = 34, B = 41, C = 67, D = 74
12b. 83, 73, 63, 53, 43
82, 72, 62, 52, 42