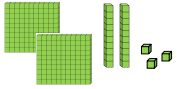
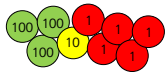


Solve the calculation using equipment.
 Explain what you did with the equipment in order to solve the calculation.

$223 - 7 = \underline{\hspace{2cm}}$

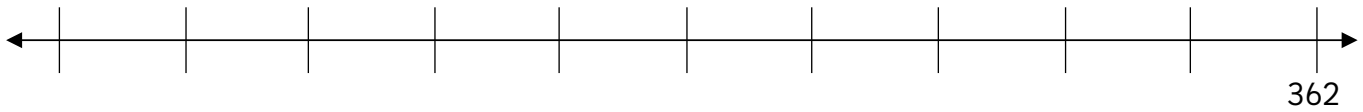


$315 - 9 = \underline{\hspace{2cm}}$

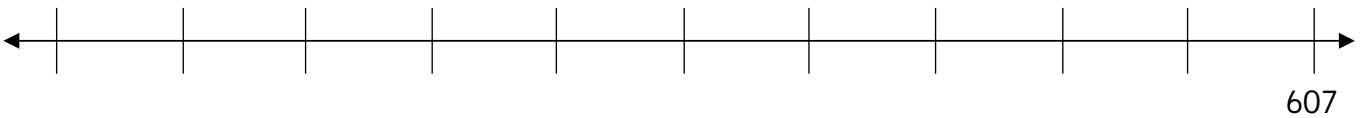


Use a number line to solve the calculations.

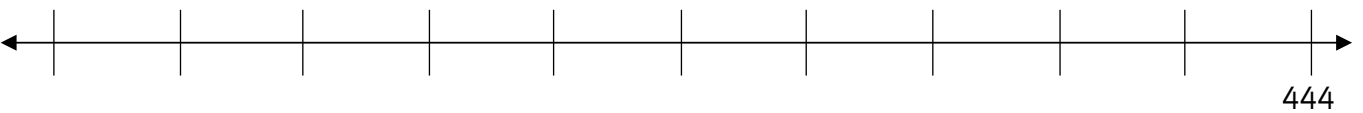
$362 - 5 = \underline{\hspace{2cm}}$



$607 - 9 = \underline{\hspace{2cm}}$



$444 - 7 = \underline{\hspace{2cm}}$



$135 - 8 = \underline{\hspace{2cm}}$

