


# Jack and the Beanstalk

## Crack the Code Addition to 10

Can you crack these addition codes? Use the key at the top of the page to see the number for each picture. Look at the pictures in the questions and write the numbers in the boxes to create and solve an addition sum.

### Key



1



2



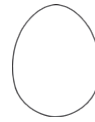
3



4



5



6



7



8



9




+



=



+



=



+



=



+



=



+




=

# Jack and the Beanstalk

## Crack the Code Addition to 10

Can you crack these addition codes? Use the key at the top of the page to see the number for each picture. Look at the pictures in the questions and write the numbers in the boxes to create and solve an addition sum.

### Key



1



2



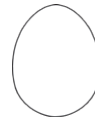
3



4



5



6



7



8



9



+




=



+



=




+



=



+



=



+



=